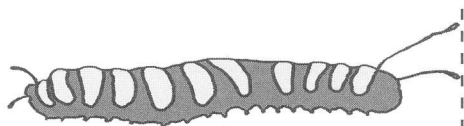
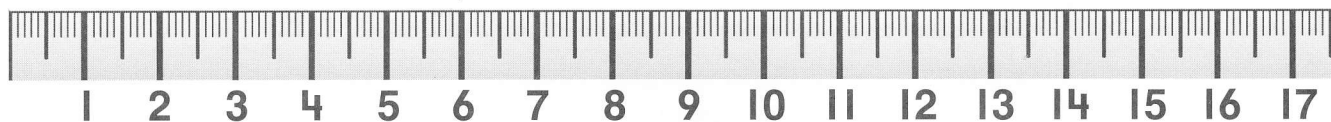


Measure the length of the object.


①



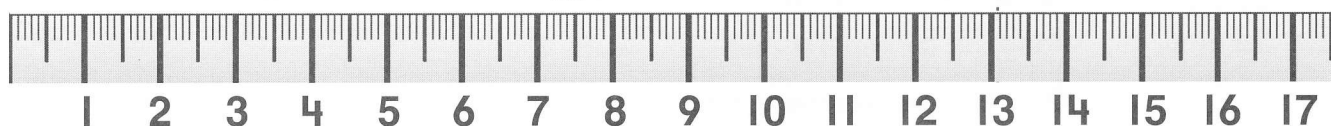
about _____ centimeters




②



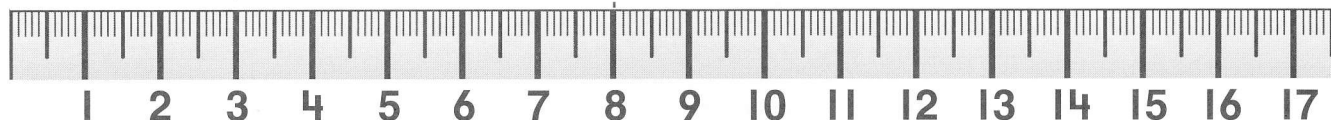
about _____ centimeters



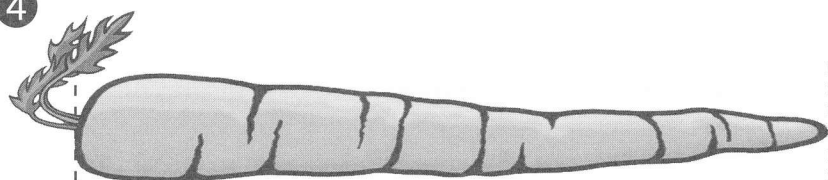
③



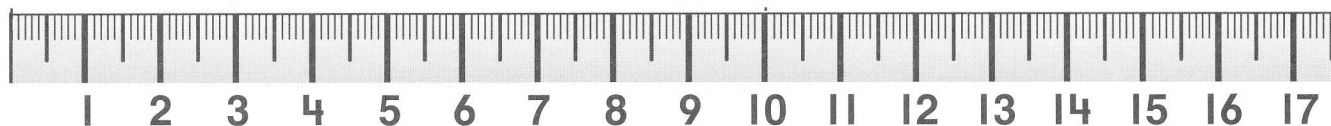
about _____ centimeters



④



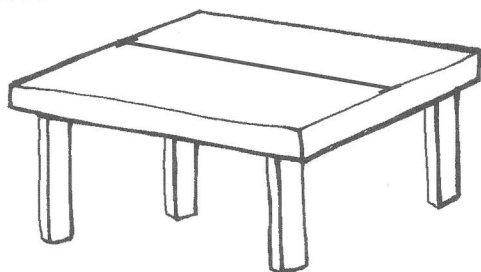
about _____ centimeters



Tell how you know the length of the object.

Measure the object in centimeters and in meters.

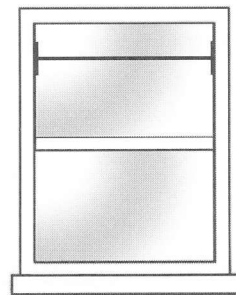
① a table



about _____ centimeters

about _____ meters

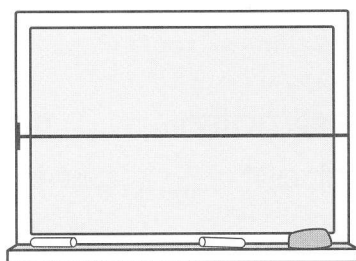
② a window



about _____ centimeters

about _____ meters

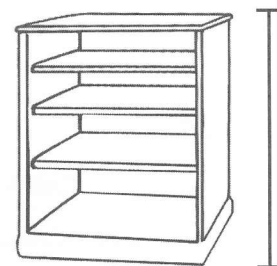
③ a board



about _____ centimeters

about _____ meters

④ a bookshelf



about _____ centimeters

about _____ meters

⑤ a classmate

about _____ centimeters

about _____ meters

⑥ the door

about _____ centimeters

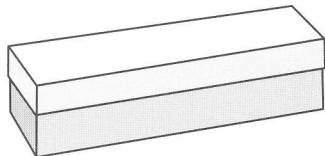
about _____ meters



Tell how the two measurements relate to the size of the units.

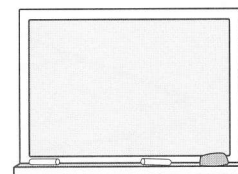
Estimate the length of the object. Circle the unit. Then measure the object.

- ① a board eraser



estimate: ____ centimeters/meters
about ____ centimeters/meters

- ② a board



estimate: ____ centimeters/meters
about ____ centimeters/meters

- ③ your shoe



estimate: ____ centimeters/meters
about ____ centimeters/meters

- ④ a friend



estimate: ____ centimeters/meters
about ____ centimeters/meters

- ⑤ a door

estimate: ____ centimeters/meters
about ____ centimeters/meters

- ⑥ a book

estimate: ____ centimeters/meters
about ____ centimeters/meters

- ⑦ the width of the hallway

estimate: ____ centimeters/meters
about ____ centimeters/meters

- ⑧ the length of the room

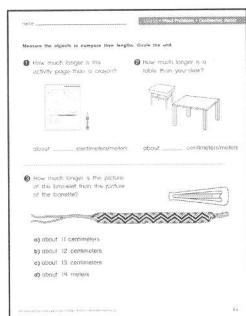
estimate: ____ centimeters/meters
about ____ centimeters/meters



Tell how you know your estimate is reasonable.


Measure the objects to compare their lengths. Circle the unit.

- ① How much longer is this activity page than a crayon?




about _____ centimeters/meters

- ② How much longer is a table than your desk?



about _____ centimeters/meters

- ③ How much longer is the picture of the bracelet than the picture of the barrette?



- a) about 11 centimeters
- b) about 12 centimeters
- c) about 13 centimeters
- d) about 14 meters